

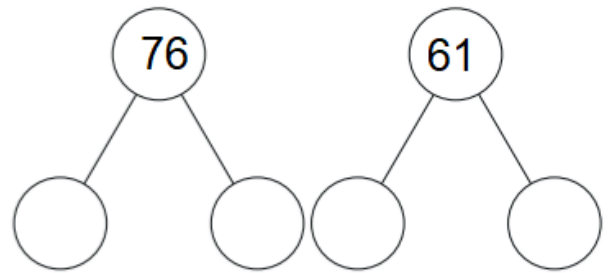
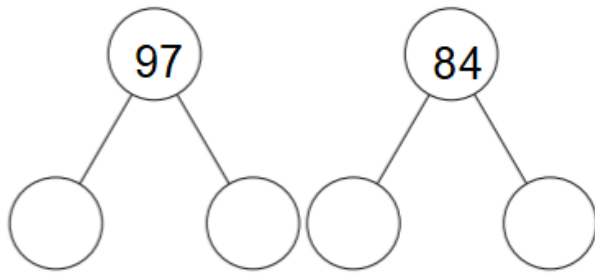
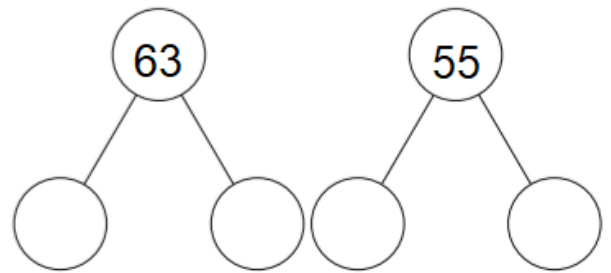
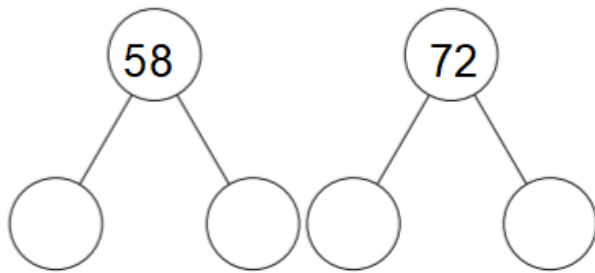
Week 1- Monday (100 grid)

1 - 100 grid

1	2	3	4	5	6	7	8	9	10
11	12	13	14	15	16	17	18	19	20
21	22	23	24	25	26	27	28	29	30
31	32	33	34	35	36	37	38	39	40
41	42	43	44	45	46	47	48	49	50
51	52	53	54	55	56	57	58	59	60
61	62	63	64	65	66	67	68	69	70
71	72	73	74	75	76	77	78	79	80
81	82	83	84	85	86	87	88	89	90
91	92	93	94	95	96	97	98	99	100

Week 1 Tuesday

Can you partition these numbers using tens and ones.



Week 1 - Wednesday

Write how many tens and ones are in each number.

78 and 61

Tens	Ones

90 and 89

Tens	Ones

64 and 92

Tens	Ones

Which number from each pair is the largest? Discuss how you know.

On the hundred square, find a number:

- *Less than 69*
- *Greater than 79*
- *Greater than 69 but less than 79*

Challenge: Eva and Alex have some number cards. They both use two of their cards to make two-digit numbers. Eva's number is bigger than Alex's number. What could their numbers be? How many answers can you find?

1

2

4



Eva



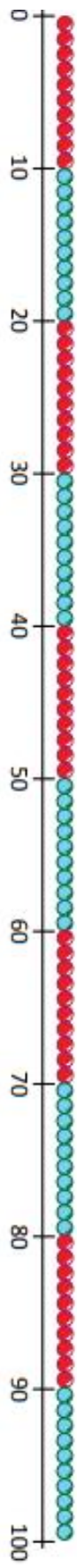
Alex

3

5

6

Week 1- Thursday



0 - 100 beaded line

Find one more and one less than the numbers in the middle column.

One less	Number	One more
	12	
	17	
	13	
	20	
	22	
	33	
	48	
	64	
	39	
	50	
	59	
	61	

Challenge

The number one less than the number I am thinking of is 75. What is my number?
The number one more than the number I am thinking of is 69. What is my number?
The number one less than the number I am thinking of is 29. What is my number?