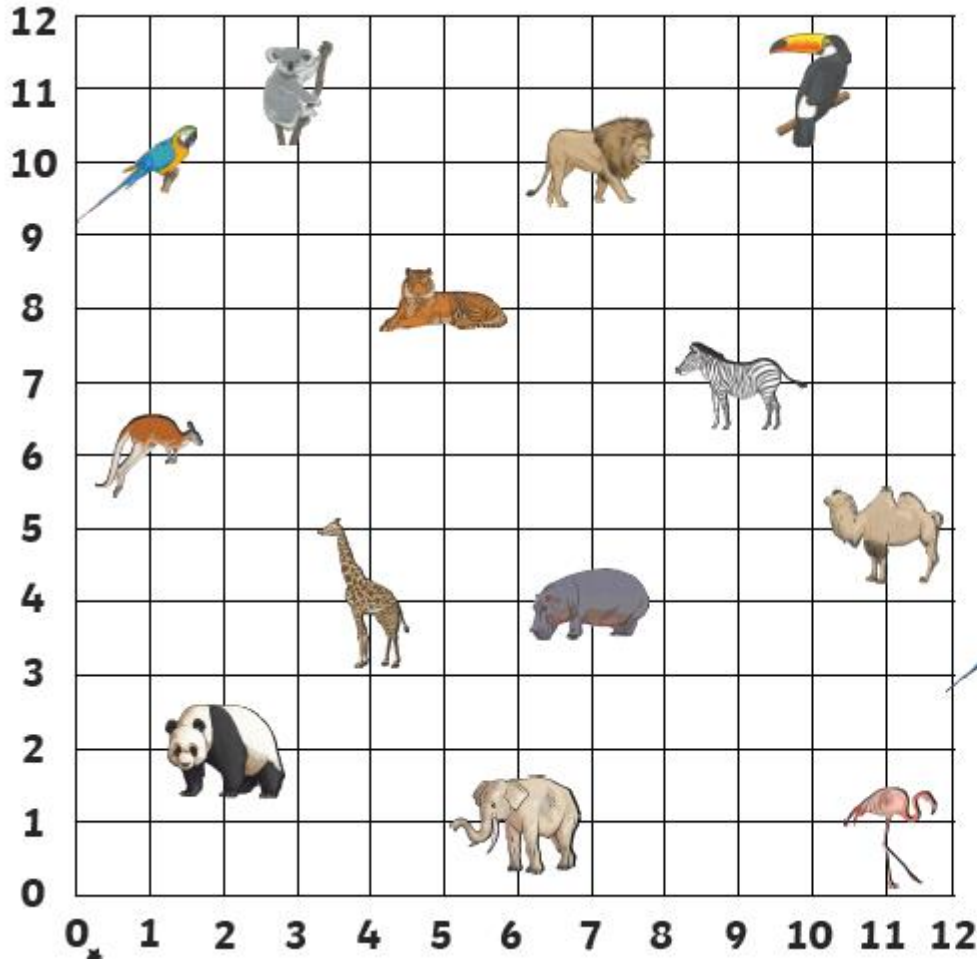


Activity 1:



Write the coordinates for the zoo animals:



= (,)



= (,)



= (,)



= (,)



= (,)



= (,)



= (,)



= (,)

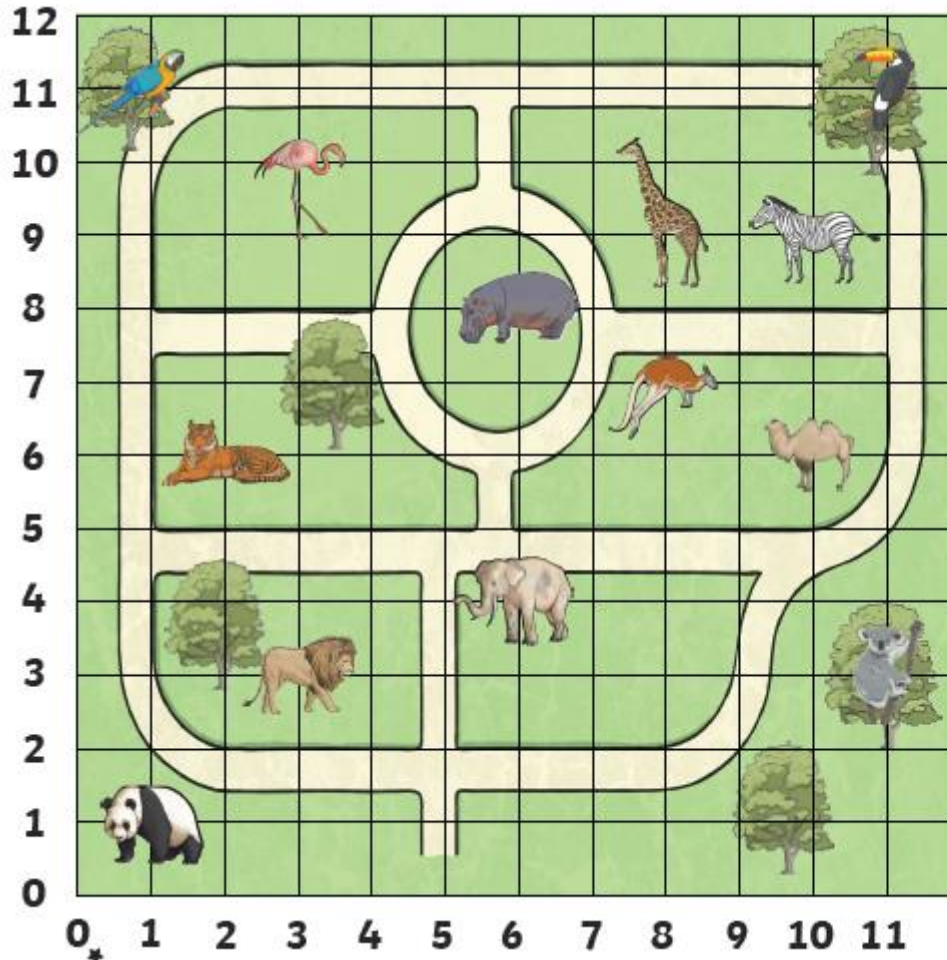


= (,)



= (,)

Challenge:





Which animal is at these coordinates on the zoo map?



(11,11) = _____ (2,6) = _____



(6,8) = _____ (3,10) = _____

(11,3) = _____ (1,1) = _____

Write the coordinates of these animals on the zoo map:

 = _____  = _____

 = _____  = _____



















 = _____  = _____

Draw your own zoo animals at these coordinates on the map:

(6,1) (2,9) (7,3)

(8,3) (8,6) (11,1)

Answers:

			
 = (3, 11)	 = (4, 4)	Which animal is at these coordinates on the zoo map?	
 = (7, 10)	 = (1, 6)	(11, 11) = toucan	(2, 6) = tiger
 = (10, 11)	 = (7, 4)	(6, 8) = hippo	(3, 10) = flamingo
 = (1, 10)	 = (11, 5)	(11, 3) = koala	(1, 1) = panda
 = (5, 8)	 = (11, 1)	Write the coordinates of these animals on the zoo map:	
		 = (1, 11)	 = (6, 4)
		 = (3, 3)	 = (10, 6)
		 = (10, 9)	 = (8, 7)